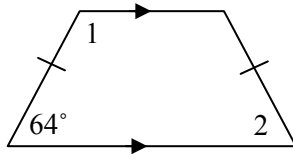
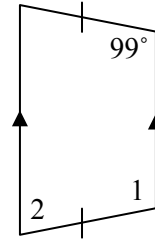


Find the measures of the numbered angles in each isosceles trapezoid.

1)

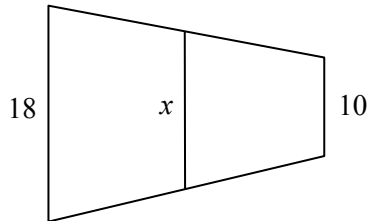


2)

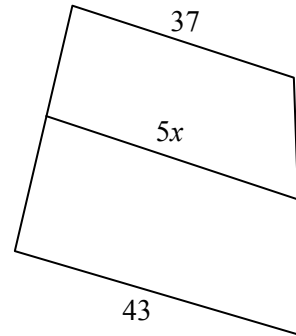


Each diagram shows a trapezoid and its median. Find the value of x .

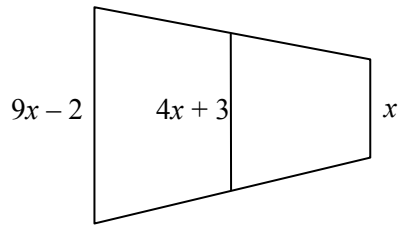
3)



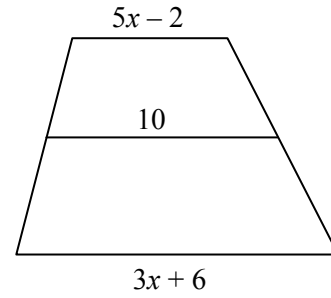
4)



5)

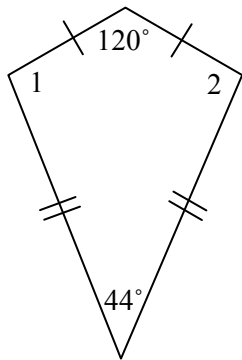


6)

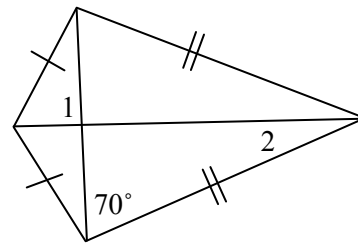


Find the measures of the numbered angles in each kite.

7)



8)



Answer Key

- 1) 116, 64
- 2) 99, 81
- 3) 14
- 4) 8
- 5) 4
- 6) 2
- 7) 98, 98
- 8) 90, 20