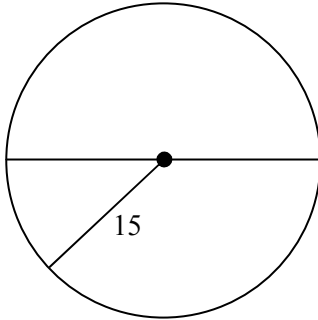
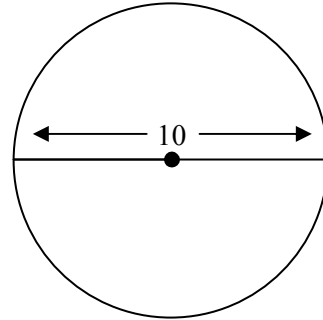


Find the circumference of each circle. Leave answers in terms of π .

1)



2)



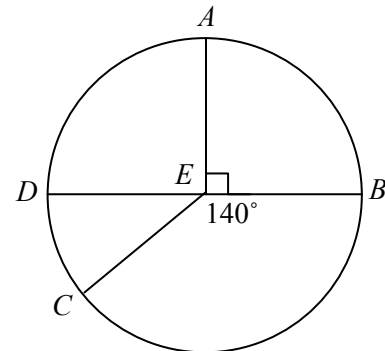
Find the measure of each arc in $\odot E$.

3) \widehat{AD}

4) \widehat{DC}

5) \widehat{CBA}

6) \widehat{CB}



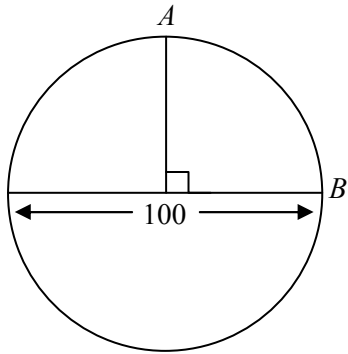
$\odot E$ has a radius of 6. Find the length of each arc.

7) \widehat{AD}

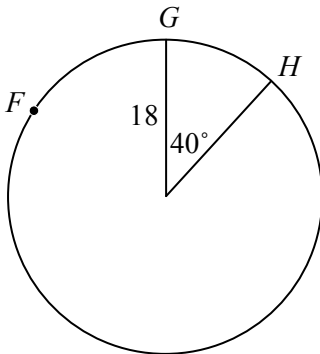
8) \widehat{DC}

Find the measure of each arc. Leave answers in terms of π .

9) \widehat{AB}



10) \widehat{HFG}



Answer Key

- 1) 30π
- 2) 10π
- 3) 90
- 4) 40
- 5) 230
- 6) 140
- 7) 3π
- 8) $4\pi/3$
- 9) 25π
- 10) 32π