

Find the area of each triangle given the base b and height h .

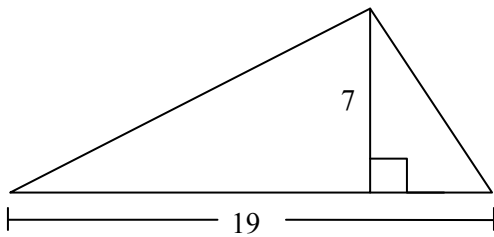
1) $b = 3, h = 4$

2) $b = 5.5, h = 7$

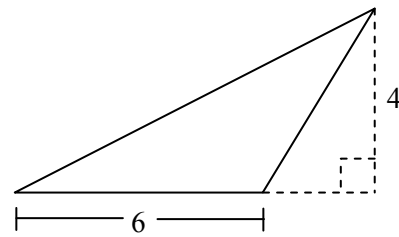
3) $b = 3.25, h = 0.5$

Find the area of each figure.

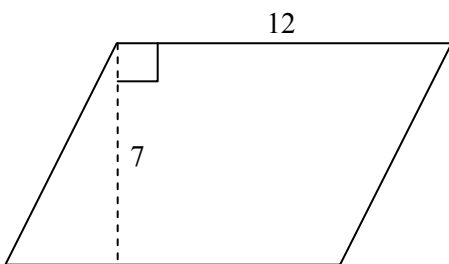
4)



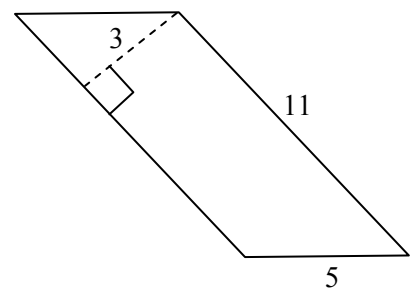
5)



6)



7)



Answer Key

- 1) 6
- 2) 19.25
- 3) 0.8125
- 4) 66.5
- 5) 12
- 6) 84
- 7) 33