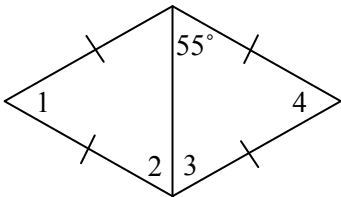


Complete the chart by places check marks in the appropriate places.

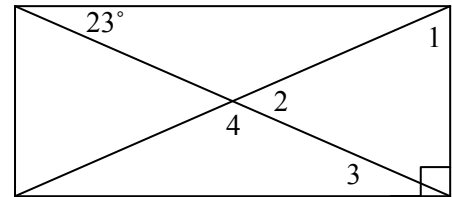
	Property	Parallelogram	Rectangle	Rhombus	Square
1)	Opposite sides are parallel				
2)	Opposite sides are congruent				
3)	Opposite angles are congruent				
4)	A diagonal forms two congruent angles				
5)	Diagonals bisect each other				
6)	Diagonals are congruent				
7)	Diagonals are perpendicular				
8)	A diagonal bisects two angles				
9)	All angles are right angles				
10)	All sides are congruent				

For each parallelogram, a) choose the best name then b) find the measures of the numbered angles.

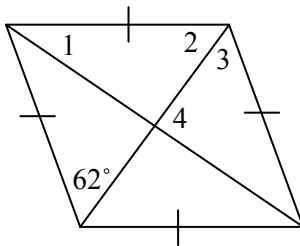
11)



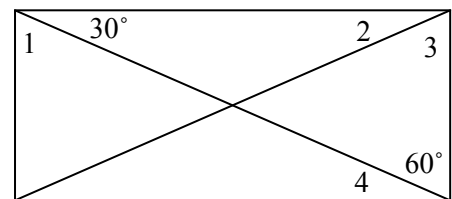
12)



13)



14)



Tutor-USA.com Worksheet

Answer Key

	Property	Parallelogram	Rectangle	Rhombus	Square
1)	Opposite sides are parallel	x	x	x	x
2)	Opposite sides are congruent	x	x	x	x
3)	Opposite angles are congruent	x	x	x	x
4)	A diagonal forms two congruent angles	x	x	x	x
5)	Diagonals bisect each other	x	x	x	x
6)	Diagonals are congruent		x		x
7)	Diagonals are perpendicular			x	x
8)	A diagonal bisects two angles			x	x
9)	All angles are right angles		x		x
10)	All sides are congruent			x	x

11) Rhombus; 70, 55, 55, 70

12) Rectangle; 67, 46, 23, 134

13) Rhombus; 28, 62, 62, 90

14) Rectangle; 60, 30, 60, 30