



What percent of each grid is shaded?


1)




2)



3)



4)



Rename as a decimal.

5) 3%

6) 17%

7) 8%

8) 12%

9) 71.6%

10) 1.3%

11) 42.18%

12) twelve and one-half percent

13) thirteen and three-fourths percent

Tutor-USA.com Worksheet

Rename as a percent.

14) 0.75

15) 0.02

16) 0.96

17) 0.068

18) 0.966

19) 0.341

20) Forty-four hundredths

21) nine hundred and sixty-seven thousandths

Answer Key

- 1) 47%
- 2) 40%
- 3) 5%
- 4) 100%
- 5) 0.03
- 6) 0.17
- 7) 0.08
- 8) 0.12
- 9) 0.716
- 10) 0.013
- 11) 0.4218
- 12) 0.125
- 13) 0.1375
- 14) 75%
- 15) 2%
- 16) 96%
- 17) 6.8%
- 18) 96.6%
- 19) 34.1%
- 20) 44%
- 21) 96.7%